



NTNU – Trondheim
Norwegian University of
Science and Technology

NORGES TEKNISK- NATURVITENSKAPELIGE UNIVERSITET

Department of Geoscience and Petroleum

Institutt for Geovitenskap og Petroleum

Examination paper for TPG4135 - Production Technology – Field Processing and Systems

Eksamensoppgave I emne TPG4135 – Produksjonsteknologi – Feltprosessering og systemer

Academic contact during examination/Kontakt person: Prof. Harald Asheim

(Prob/Opp 4), Prof. Milan Stanko (Prob/Opp. 1-3)

Phone/Mobiltelefon: +47 450 65 771, +47 954 40 756

Examination date/ Eksamensdato: May 29, 2019

Examination time/Eksamenstid: 15:00-19:00

Permitted examination support material/Tillatte hjelpemidler: D, Approved
calculator permitted/ Bestemt, enkel kalkulator tillatt

Other information/Andre informasjon:

Language/Språk: English/Bokmål

Number of pages (front page excluded)/Antall sider: 3

Number of pages enclosed:

Informasjon om trykking av eksamensoppgave

Originalen er:

1-sidig **2-sidig**

sort/hvit **farger**

Checked by/Verifisert av:

Date

Signature

PROBLEM 1. (15 POINTS) The molar composition of separator oil (liquid) has been measured in the lab (see the table below).

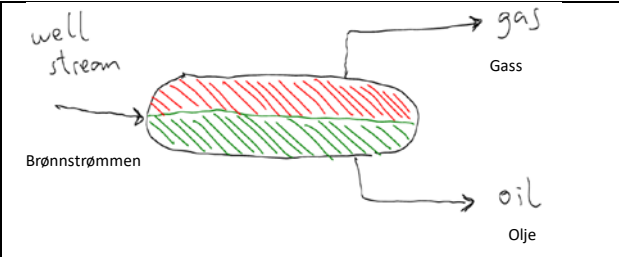
Estimate the composition of the inlet mixture.

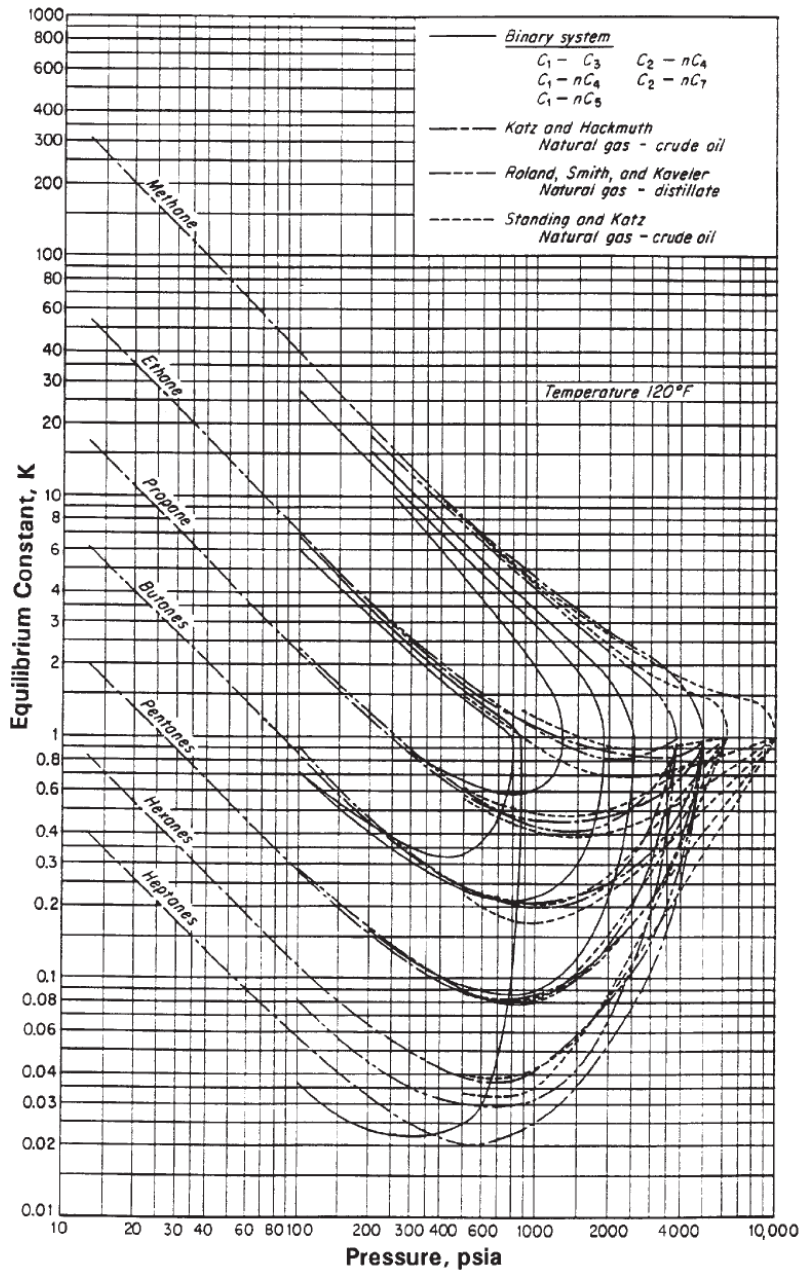
- Assume that the vapor molar fraction (F_v) is 0.16.
- Separator pressure is 100 psia and separator temperature 120 F.
- The chart provided below shows vapor equilibrium K_i values versus pressure.

OPPGAVE 1 (15 POENGER) Molaritetene av separatorolje (væskefase) har vært målt i laboratoriet (se tabellen under)

Beregn molariteter av innløpsblandingen (olje+gass).

- Anta at dampmolefraksjonen (F_v) er 0.16.
- Separatortrykk er 100 psia og separatortemperatur 120 F.
- Grafen nedenfor viser damp-likevekt K_i -verdier versus trykk.

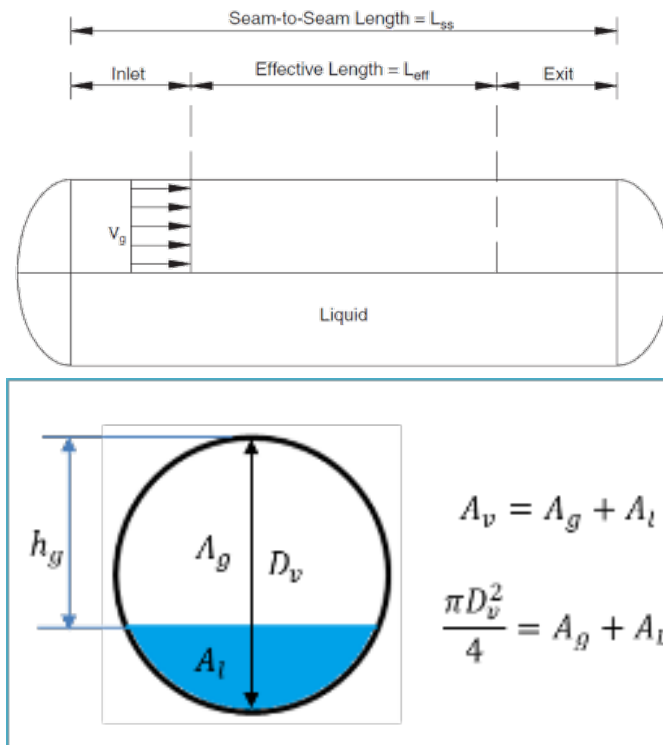
	<table border="1"> <thead> <tr> <th>Component/ stoff</th> <th>Molar fraction/ Molaritet</th> </tr> </thead> <tbody> <tr> <td>Methane/Metan</td> <td>0.0138</td> </tr> <tr> <td>Propane/Propan</td> <td>0.1701</td> </tr> <tr> <td>Hexane/Hexan</td> <td>0.8161</td> </tr> </tbody> </table>	Component/ stoff	Molar fraction/ Molaritet	Methane/Metan	0.0138	Propane/Propan	0.1701	Hexane/Hexan	0.8161
Component/ stoff	Molar fraction/ Molaritet								
Methane/Metan	0.0138								
Propane/Propan	0.1701								
Hexane/Hexan	0.8161								
<p>Remember that/Husk at</p> $Z_i = F_v \cdot y_i + (1 - F_v) \cdot x_i$									



PROBLEM 2 (25 POINTS)
OPPGAVE 2 (25 POENGER)

1. The gas capacity of a horizontal gas/liquid separator is defined by the equation/Gass kapasitet av en væske-gass separator er gitt:

$$\frac{L_{eff} A_g}{h_g} > \frac{Q_g}{V_t}$$



Where A_g and A_l are the cross-sectional area of the gas section and liquid section respectively. Q_g is the local gas rate. / Hvor A_g og A_l er tverrsnittsareal av gass og væske lag henholdsvis. Q_g er den lokalt gassraten.

Explain how is this equation derived (step by step) / Forklare hvordan er ligningen avled (steg for steg)

2. In the expression presented earlier, what does V_t represent and how is it derived? / I ligningen vist tidligere, hva V_t betyr og hvordan avledes?

PROBLEM 3 (25 POINTS)

Figure 1 shows a subsea system designed to boost a mixture of water and oil from a manifold to the platform.

Figur 1 viser en undervannsproduksjonssystem som skal transportere en blanding av olje og vann fra en manifold til platformen.

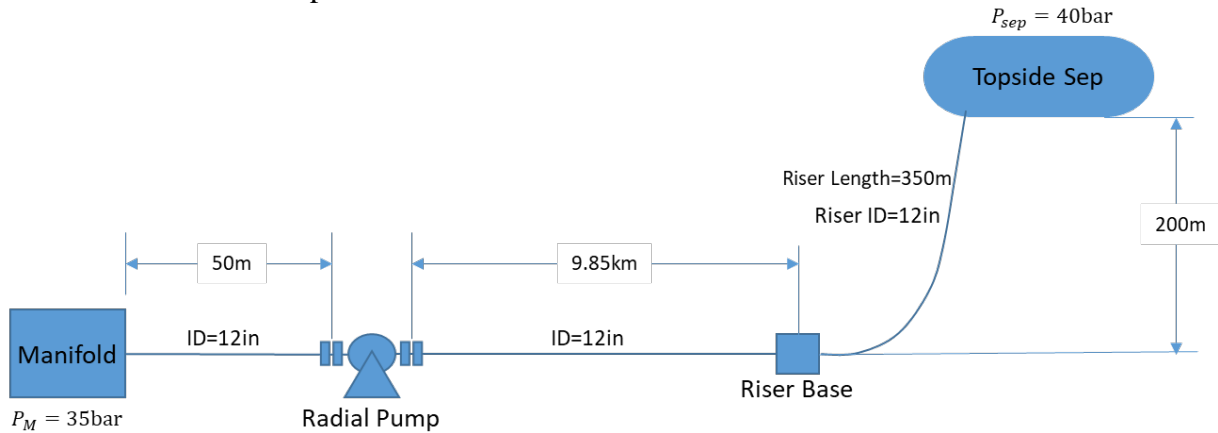
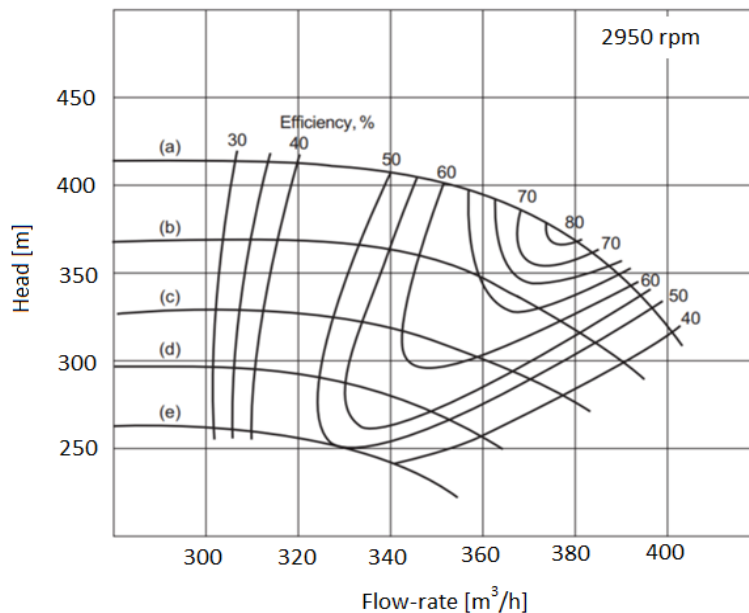


Figure 1 System description/Oversikt av systemet

The manufacturer has provided in Figure 2 the performance (head versus rate) of the pump to be installed. There are 5 impeller sizes available for the same pump casing. Based on your system characteristics you must decide which impeller size is the most suitable option to provide a rate of at least $350\text{ m}^3/\text{h}$.

Pumpeprodusent har gitt I figur 2 pumpekurver (løftehøyde vs. Flow) av pumpen som skal installeres. Det finnes 5 forskjellige rotorstørrelser tilgjengelige til samme pumpehus. Basert på systemytelsen, du må bestemme hvilket rotor er mer passende for å gi en væskerate av minst $350\text{ m}^3/\text{t}$



- Impeller sizes:**
- (a) 250 mm
 - (b) 225 mm
 - (c) 200 mm
 - (d) 175mm
 - (e) 150mm

Figure 2 Performance curve of the radial pump

Task/Oppgave:

1. Select an appropriate impeller diameter of the radial pump to provide the desired rate. Calculate the operating point (flow rate and head) for your selection.
1. Velg en passende rotorstørrelse av pumpen for å gi ønsket raten. Beregne rate og løftehøyde for din valg.

Additional considerations/supplerende informasjon:

- *Consider the change in kinetic energy is negligible of fluid in the suction and discharge piping. /Neglisjere endringer I kinetisk energi I systemet nedstrøm og oppstrøm pumpen*
- *Consider constant Darcy friction factor of 0.023 and neglect the minor losses (accessories) in the pipe/ Antar at Darcys friksjonsfaktor er konstant og har en Verdi av 0.023. Neglisjere mindre tap I restriksjoner*
- *Gravity acceleration/Tyngdeakselerasjon: 9.81 m/s^2*
- *Density of oil-water mixture/ densitet av olje-vann blanding: $\rho_l = 940 \text{ kg/m}^3$*

PROBLEM 4 (35 POINTS)

Prosessen for Statfjord A er illustrert i figur 6.1 nedenfor. Figur 6.2 angir adiabatisk eksponent for alifatiske naturgasser (metan, etan, osv.)

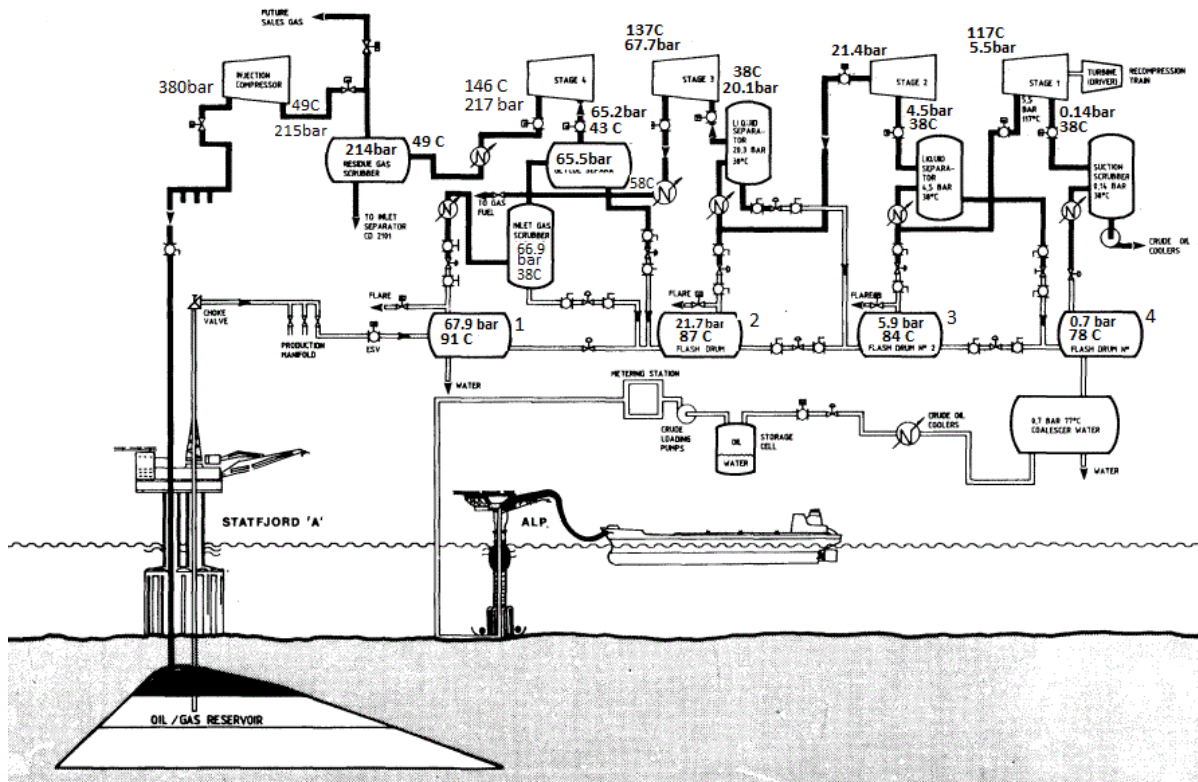
The process for Statfjord A is illustrated in figure 6.1 below. Figure 6.2 indicates adiabatic exponent for aliphatic natural gases (methane, ethane, etc.)

Gitt/given :

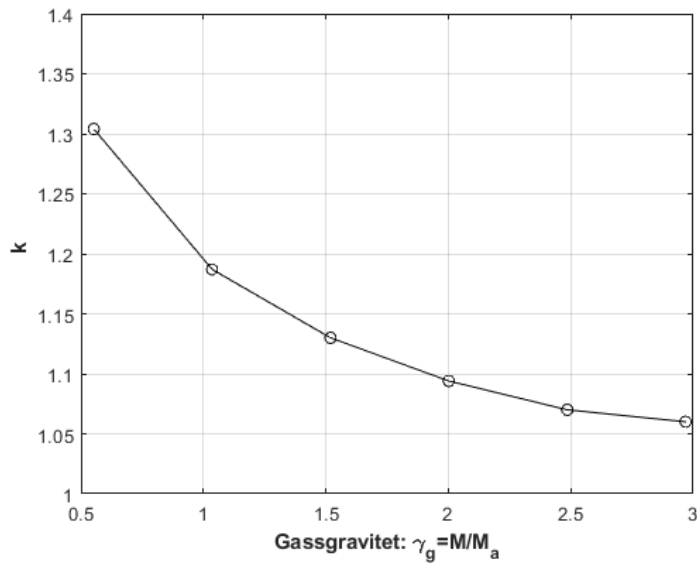
- Produksjon olje/Oil production: $20\,000 \text{ Sm}^3/\text{d}$
- Gassproduksjon/ gas production $40 \cdot 10^5 \text{ Sm}^3 / \text{d}$
- Vann/oljeforhold/ WOR: $R_w=0.01$
- Spesifikk tettheter/gravity olje: 0.825, gass: 0.7, vann: 1

- a) Estimer utløpstemperatur for injeksjons-kompressoren.**
- b) Estimer effektbehov for injeksjons-kompressoren**
- c) Basert på svartoljemodell, estimer gass-strøm (kg/s) gjennom kompressor 2 .**
- d) Estimer utløpstemperatur kompressor 2. Vurder/diskuter eventuelt avvik mellom ditt estimat og utløpstemperaturen 126 C, estimert ved komposisjonell simulering.**

- a) Estimate outlet temperature from the injection compressor.*
- b) Estimate power requirements of the injection compressor*
- c) Based on black oil model, estimate gas flow (kg / s) through compressor stage 2*
- d) Estimate the outlet temperature compressor 2. Evaluate / discuss any deviation between your estimate and the temperature estimated by compositional simulation: 126 C.*



Figur 6.1 Prosesdiagram Statfjord A



Figur 6.2 Adiabatisk eksponent

Oppgitt /Given

γ_o : oljegravitet, $\gamma_o = \rho_o / \rho_w$

γ_g : gassgravitet, $\gamma_g = \rho_g / \rho_a = M_g / 28.97$

General gas constant: 8314 J/(kmol K)

Mole weight air

: 28.97 kg/kmole

Flow in pipes:

$$\frac{\partial p}{\partial x} + \rho v \frac{\partial v}{\partial x} + \rho g_x + \frac{1}{2} f \frac{\rho}{d} v^2 = 0$$

General gas equation: $pV = znRT$

Adiabatic model:

$$pV^k = p_i V_i^k$$

$$T_2 = T_1 \left(\frac{p_2}{p_1} \right)^{\frac{k-1}{k}}$$

Heat transfer, Heat exchanger

$$dq = -U(T - T_a) \pi D dx$$

$$dq = c_p \dot{m} dT$$

$$\text{Mean temperature drop: } \Delta T_m = \frac{\Delta T_1 - \Delta T_2}{\ln(\Delta T_1 / \Delta T_2)}$$

$$\Delta T_1 = T_{a,2} - T_{i,1}$$

$$\Delta T_2 = T_{a,1} - T_{i,2}$$

Black oil model relations

$$Q_g = q_o (R_t - R_s) B_g$$

$$Q_l = q_o (B_o + R_w B_w)$$

$$R_s = 0.00590 \gamma_g 10^{2.14/\gamma_o} 10^{-0.00198 T} (0.797 \cdot 10^{-5} p + 1.4)^{1.205}$$

$$B_o = 0.9759 + 0.952 \cdot 10^{-3} \left((\gamma_g / \gamma_o)^{0.5} R_s + 0.401 T - 103 \right)^{1.2}$$

$$B_g = \frac{p^o T}{p T^o} z$$

Gas compression

$$w = p_1 V_1 \frac{k}{k-1} \left(\left(\frac{p_2}{p_1} \right)^{\frac{k-1}{k}} - 1 \right)$$

$$\dot{m} w = \dot{m} \frac{RT_1}{Mz_1} \frac{k}{k-1} \left(\left(\frac{p_2}{p_1} \right)^{\frac{k-1}{k}} - 1 \right) \frac{z_1 + z_2}{2}$$

TPG4135 – SPRING 2019 – Exam solution

Problem 1:

Reading from the chart, for separator pressure and temperature:

$$K_{C1} = 40$$

$$K_{C3} = 2.1$$

$$K_{C6} = 0.11$$

Now, x_i is given, with $K_i = y_i / x_i$ this gives:

$$y_{C1} = 0.553$$

$$y_{C3} = 0.357$$

$$y_{C6} = 0.089$$

then, using the expression with the mole vapor fraction provided:

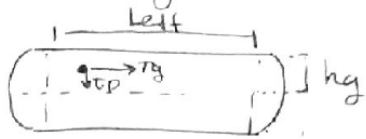
$$z_{C1} = 0.1$$

$$z_{C3} = 0.2$$

$$z_{C6} = 0.7$$

Problem 2.1:

For a horizontal tank



$$\tau_p < \tau_g$$

The time that take the particle to travel vertically a " h_g " distance should be less than the time that the gas take to travel horizontally towards the outlet

$$\tau = \frac{L}{V} \quad \left[\frac{m}{m/s} \right]$$

$$\frac{h_g}{v_t} < \frac{L_{eff}}{v_g}$$

$$v_g = \frac{Q_g}{A_g} \quad \left[\frac{m^3/s}{m^2} \right]$$

where h_g : is the height of gas

v_t : terminal velocity

v_g : gas velocity

L_{eff} : tank effective length

$$\frac{h_g}{v_t} < \frac{L_{eff} A_g}{Q_g} \rightarrow \frac{Q_g}{v_t} < \frac{L_{eff} A_g}{h_g}$$

Problem 2.2

v_t represents the terminal velocity of the droplet and it is the vertical velocity at which the droplet travels in the gas towards the gas-liquid interface. It is usually derived by performing a force balance on the droplet considering weight, drag and buoyancy.

Problem 3

1.- Define the system curve:

Applying Bernoulli between Manifold and Suction, and between discharge and the topside.

Manifold \rightarrow Suction

$$\frac{P_H}{\rho g} + \frac{V_H^2}{2g} + z_H = \frac{P_S}{\rho g} + \frac{V_S^2}{2g} + z_S + h_L^s$$

$$H_S = \frac{P_S}{\rho g} = \frac{P_H}{\rho g} - \frac{V_S^2}{2g} + (z_H - z_S) + h_L^s \quad z_H = z_S \therefore$$

Discharge \rightarrow topside

$$\frac{P_D}{\rho g} + \frac{V_D^2}{2g} + z_D = \frac{P_T}{\rho g} + \frac{V_T^2}{2g} + z_T + h_L^d$$

$$H_D = \frac{P_D}{\rho g} = \frac{P_T}{\rho g} - \frac{V_D^2}{2g} + (z_T - z_D) + h_L^d$$

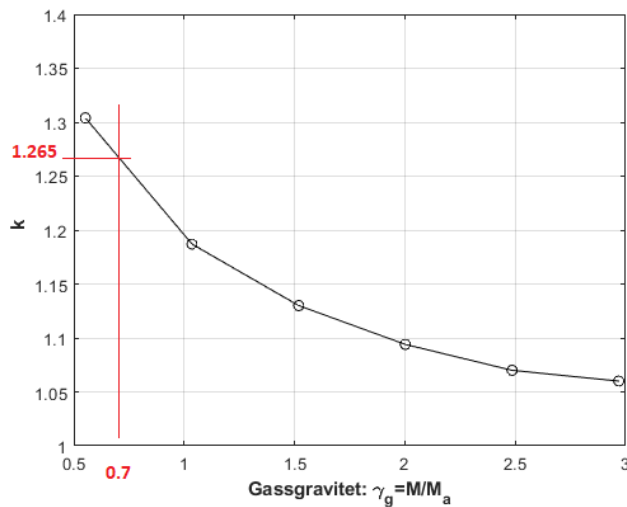
The differential head required is: $\Delta H = H_D - H_S$

$$\Delta H = \frac{P_T - P_H}{\rho g} + \frac{V_S^2 - V_D^2}{2g} + (z_T - z_D) + \Sigma h_L$$

Diameter at suction = Diameter discharge. $V_S = V_D$

$$\Delta H = \frac{P_T - P_H}{\rho g} + (z_T - z_D) + \Sigma h_L$$

Adiabatisk eksponent, estimert for gassgravitet: 0.7



$$T_2 = T_1 \left(\frac{p_2}{p_1} \right)^{\frac{k-1}{k}} = (49 + 273) \left(\frac{380}{215} \right)^{\frac{1.265-1}{1.265}} = 362.8 \text{ K} \rightarrow \underline{\underline{t_2 = 89.8 \text{ C}}}$$

Nærmere temperaturen oppgitt: 90C, enn vi kan forvente

b) Effekt, injeksjonskompressor

$$\text{Massestrøm: } \dot{m}_g = \rho_g^o q_g = (0.7 \cdot 1.23) \cdot (40 \cdot 10^5 / 86400) = 39.9 \text{ kg / s}$$

$$\dot{w} = \dot{m}_g \frac{RT_i}{M} \frac{k}{k-1} \left(\left(\frac{p_2}{p_1} \right)^{\frac{k-1}{k}} - 1 \right) = 39.9 \frac{8314 \cdot (49 + 273)}{0.7 \cdot 1.23} \frac{1.265}{0.265} \left(\left(\frac{380}{215} \right)^{\frac{0.265}{1.265}} - 1 \right) = \underline{\underline{3.59 \cdot 10^6 \text{ W}}}$$

c) Kompressor 2

Kompressor 2 håndterer gass fra separator 3 og 4. Gass-strømmen tilsvarer gass som frigis mellom separator 2 (21.7 bar, 87C) og 4 (0.7 bar, 78 C). Med svartoljekorrelasjon

$$R_{s2} = 0.00590 \gamma_g 10^{2.14/\gamma_g} 10^{-0.00198 T_2} (0.797 \cdot 10^{-5} p_2 + 1.4)^{1.205} = 10.7$$

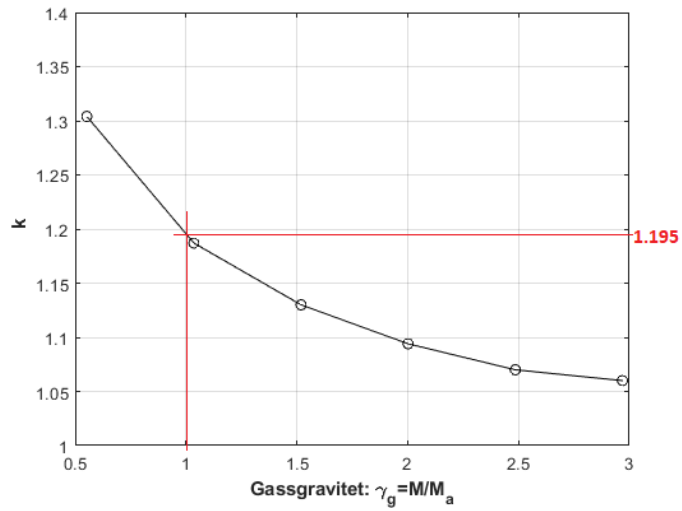
$$R_{s4} = 0.00590 \gamma_g 10^{2.14/\gamma_g} 10^{-0.00198 T_4} (0.797 \cdot 10^{-5} p_4 + 1.4)^{1.205} = 0.73$$

$$\dot{m}_{g2} = \rho_g^o q_{g2} = \rho_g^o (R_{s2} - R_{s4}) q_o = (0.7 \cdot 1.23) \cdot (10.7 - 0.7) 20000 / 86400 = \underline{\underline{2.0 \text{ kg / s}}}$$

d) Utløpstemperatur kompressor 2

$$\text{Estimat: } T_{2u} = T_{2i} \left(\frac{p_{2u}}{p_{2i}} \right)^{\frac{k-1}{k}} = (38 + 273) \left(\frac{21.4}{4.5} \right)^{\frac{1.265-1}{1.265}} = 431 \text{ K} \rightarrow \underline{\underline{t_{2u} = 158 \text{ C}}}$$

Dette er betydelig over gitt temperatur 126: En åpenbar feilkilde er at vi forutsatt gjennomsnittlig gassgravitet : 0.7, samsvar med svartoljemodellen. I realiteten vil andelen tyngre gasser som frigjøres være større ved låge trykk. Om vi for eksempel antar gravitet som for luft: $\gamma_g=1$, skulle det tilsvare adiabatisk eksponent: 1.195



Revidert temperaturestimat

$$T_{2u} = T_{2i} \left(\frac{p_{2u}}{p_{2i}} \right)^{\frac{k-1}{k}} = (38 + 273) \left(\frac{21.4}{4.5} \right)^{\frac{0.195}{1.195}} = 401K \rightarrow \underline{\underline{t_{2u} = 128C}}$$

Bringar temperaturestimatet nært oppgitt utløpstemperatur